


Измерительная машина

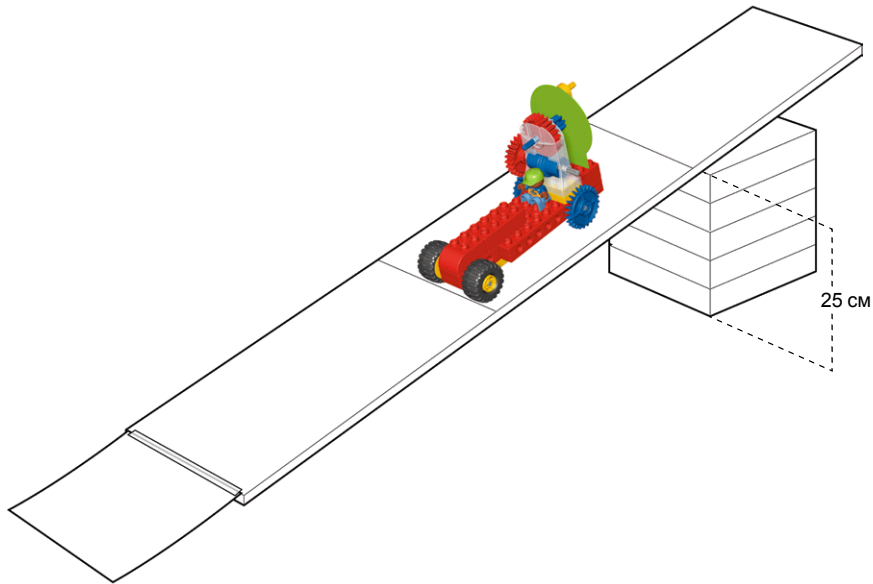
Имя, фамилия: _____

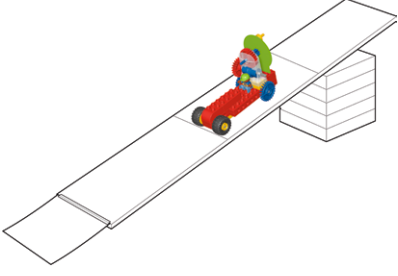
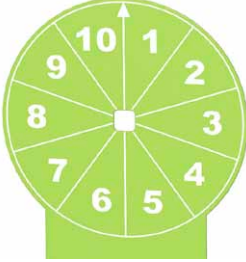
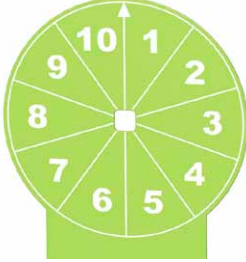


Далеко ли?

	Мое предложение	Что у меня получилось
<p>A</p> <p>Diagram A shows a toy car on a ramp. The dial on the car is positioned at the number 10.</p>	<p>A green circular dial with numbers 1-10 and an arrow pointing to 10.</p>	<p>A green circular dial with numbers 1-10 and an arrow pointing to 10.</p>
<p>B</p> <p>Diagram B shows a toy car on a ramp. The dial on the car is positioned at the number 10.</p>	<p>A green circular dial with numbers 1-10 and an arrow pointing to 10.</p>	<p>A green circular dial with numbers 1-10 and an arrow pointing to 10.</p>

Еще дальше?



	Мое предположение	Что у меня получилось
<p>C</p> 		
<p>D</p> 